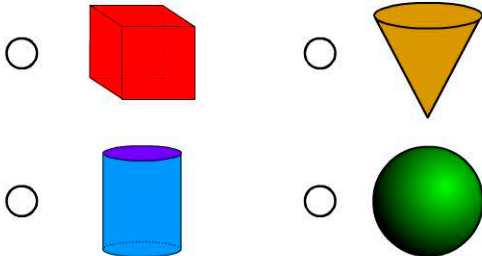


3D Space

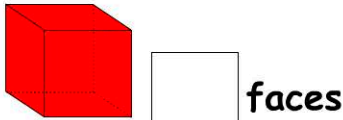
Name:

Date:

1. Which 3D object is a cylinder?



2. How many faces does this object have?




3. Name this object.



- cylinder cone
 pyramid prism

4. Which property of a cylinder is not true?



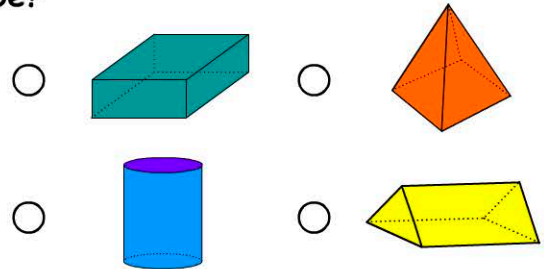
- 4 sides 2 edges
 3 faces 0 corners

5. Which item is in the shape of a rectangular prism?

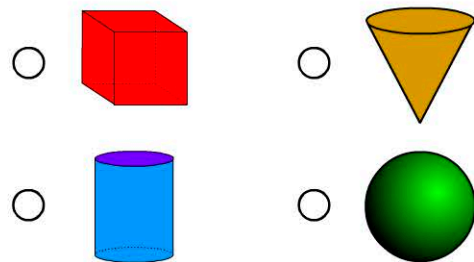


-

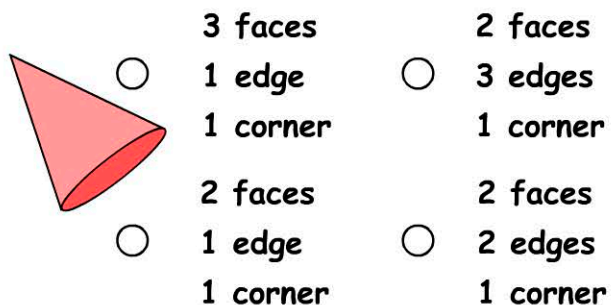
6. Which object has the same number of faces, edges and corners as a cube?



7. Which object is a sphere?



8. Choose the correct set of properties for a cone.



9. How many corners does a sphere have?

10. A closed cylinder has faces?