

Volume

Name:

Date:

1. How much more is the can able to hold?

0.375L 250mL



- 0.1L 0.115L
 105mL 125mL

2. How many millilitres in 8.025 litres?

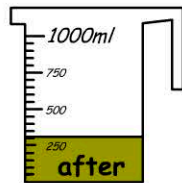
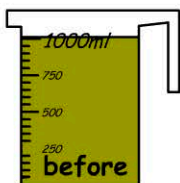
answer: millilitres

3. Janie filled 3 buckets with water. How much water did she use?



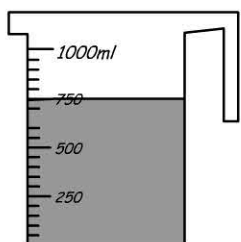
- 12500mL
 24000mL
 25500mL
 27500mL




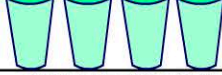
4. How much gravy was used?



- 0.7L 0.55L 0.5L 0.3L

5. How many glasses of water were used?



- 
 
 
 

6. How many cans of water are needed to fill the bucket?



0.375L

- 23 18
 21 16

7. Total

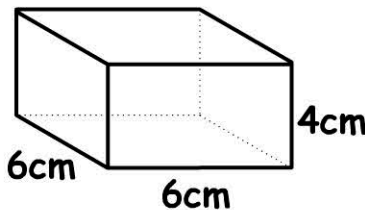
capacity =



375mL 250mL

- 4.325L 4890mL
 4.625L 4.25L

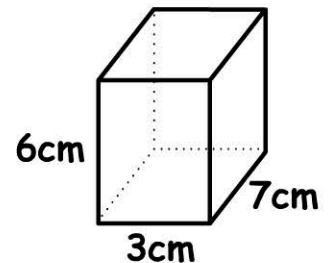
8. Volume =



- 36 cm³
 96 cm³
 144 cm³
 176 cm³

9. Volume =

cm³



10.

0.4L + 5L + 75mL = mL