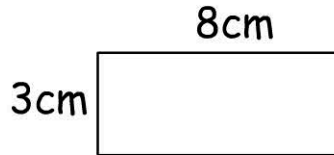


# Perimeter

Name:

Date:

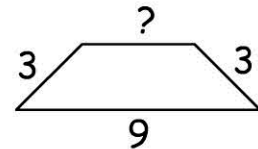
perimeter =



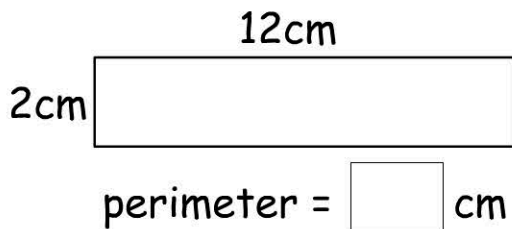
- 11cm       24cm  
 22cm       38cm

Calculate the length of the missing side.

perimeter = 22



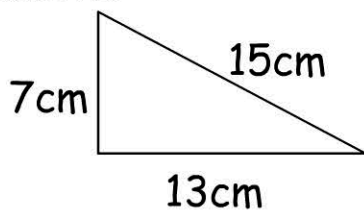
- 37       9       7       6



What is the perimeter of a square that has 8m sides.

- 32m       56m  
 34m       64m

Perimeter =



- 32cm       34cm  
 33cm       35cm

The perimeter of a pentagon with 6 cm sides is:

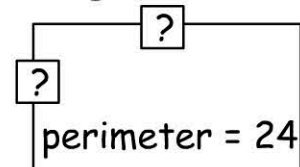
- 20cm       30cm  
 25cm       35cm

Henry walked around his paddock twice. How far did he walk?

One lap = 350m

- 700m       450m  
 600m       350m

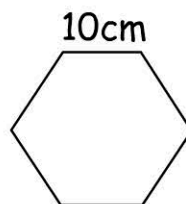
What are the missing sides. Choose two answers.



- 4       6       8       10

Shape: square      Each Side: 15cm

perimeter =  cm



perimeter =  cm