

Chance, Position & Mixed Operations

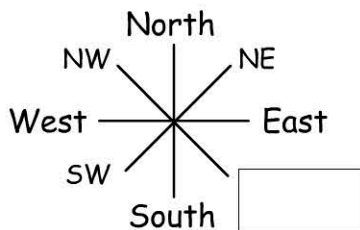
Name:

Date:

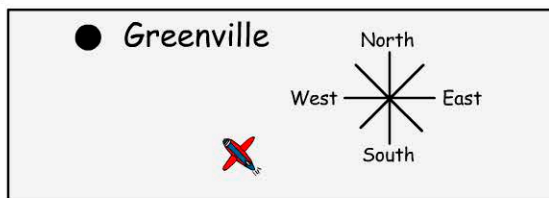
1. If rolling 2 dice which total has the greatest chance of occurring?

- 2 8
 3 12

2. Fill in the missing compass point.



3. In which direction must the plane travel to reach Greenville?



- NE W
 NW SW

4. I can make _____ outfits.



- 6 10
 8 12

5. $45 + 6 \times 10 =$

- 105 61
 510 95

6.


	A	B	C	D	E	F	G	H	I
1									
2									
3									
4									

 ● Thompson
● Bolton ● Hurst

What are the coordinates of Bolton?

- B1 F1
 B4 A4

7. What's the chance of picking a red marble from the bag?



- 1 in 8 1 in 3
 4 in 8 3 in 8

8. What's the chance of catching a red and black fish?



- 1 in 2 3 in 7
 4 in 8 4 in 9

9. $250 - 6 \times 15 =$

10. $6 \times 12 - 3 \times 5 =$