

# Four Operations, Money and Mass


Name:

Date:

1.  $5 + 5 + 5 + 5 =$

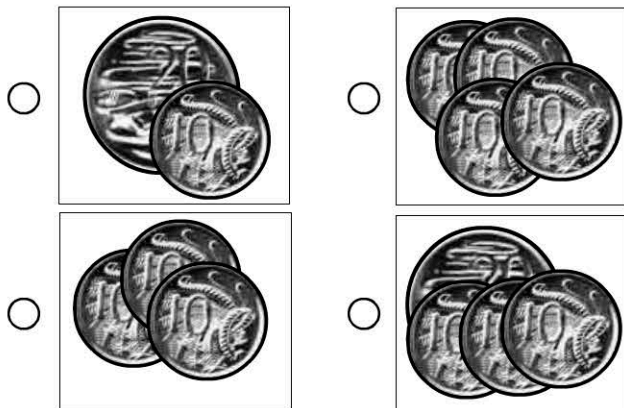
☐ 10 ☐ 25

☐ 20 ☐ 30




6 groups of 5 =

3. Which is equal to 40c?



4. The tin is equal in weight to?




- ☐ 1 block  
☐ 2 blocks  
☐ 3 blocks  
☐ 4 blocks

5.  $6 + 5 + 6 =$

14 15 16 17

☐ ☐ ☐ ☐

6.  $12 \div 4 =$

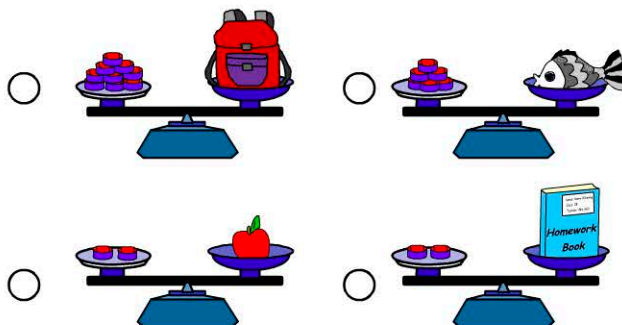


☐ 1 ☐ 3  
☐ 2 ☐ 4

7. How much money does Jen have?



8. Which item is the heaviest?



9. Which number comes next in the pattern?

10, 20, 30, 40,

10.  $3 \times 5 =$