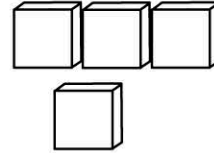


Name: _____

Area


- 1) Use 1cm blocks to cover these shapes.
2) Count how many blocks are needed.



This shape is the same as
_____ blocks




This shape is the same as
_____ blocks



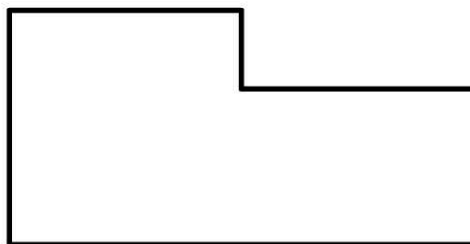
This shape is the same as
_____ blocks



This shape is the same as
_____ blocks



This shape is the same as
_____ blocks



This shape is the same as
_____ blocks