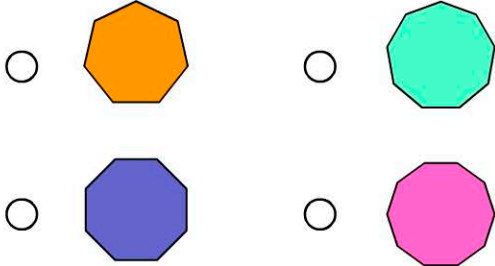


2D Space

Name:

Date:

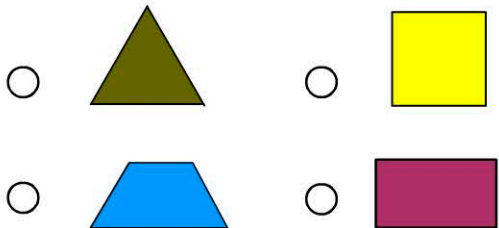
1. Which 2D shape is a nonagon?



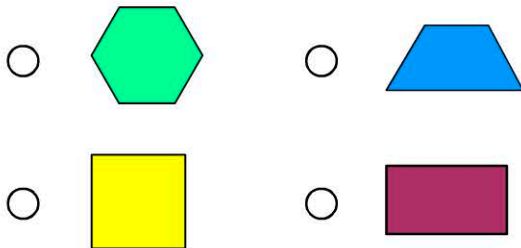
2. How many angles does a decagon have?

A decagon has angles.

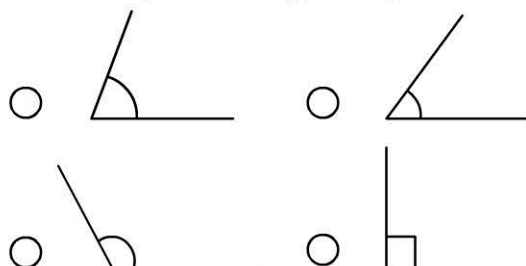
3. Which shape is not a quadrilateral?



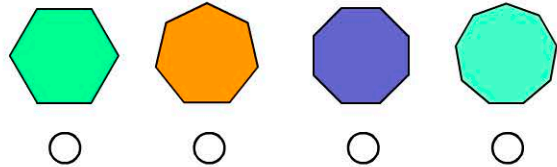
4. Which of these shapes has a single line of symmetry?



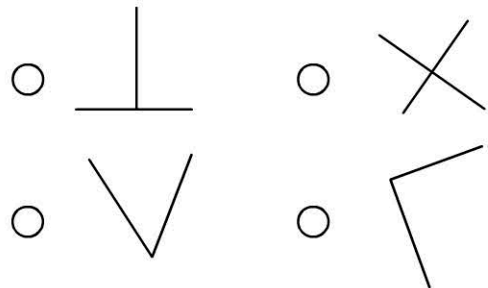
5. Which angle is a right angle?



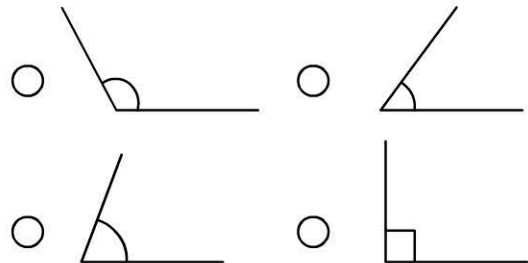
6. Which shape has one more side and angle than a hexagon?



7. Which lines are not perpendicular?



8. Which is the obtuse angle?



9. How many angles do all irregular quadrilaterals have?

angles

10. A square has right angles?