


- 1 Jerry is trying to save \$100 for a new bike. So far he has saved \$36. How much more does he need to save?



A: 64

- 2 There are 100 students in grade 3. 62 are girls. How many boys in grade 3



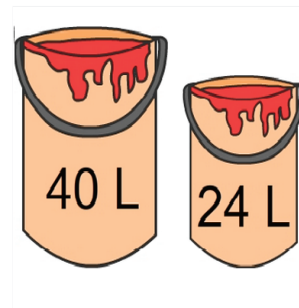
A: 38

- 3 Altogether there are 100 balls. 78 are in the box and the rest are on the ground. How many balls are on the ground?



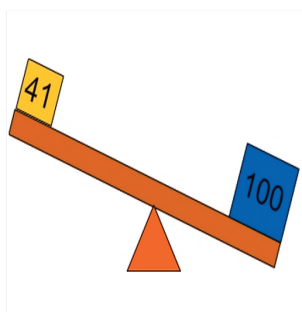
A: 22

- 4 100 L of paint is needed to paint the house. So far 64 L has been used. How much more paint will be used?



A: 36

- 5 For the scale to balance there must be an equal amount of weight on both sides. How much weight must be added to 41 kg so it balances with the 100 kg block?



A: 59

- 6 Bert has 100 lettuces to plant. He has planted 67. How many more lettuces does he need to plant?



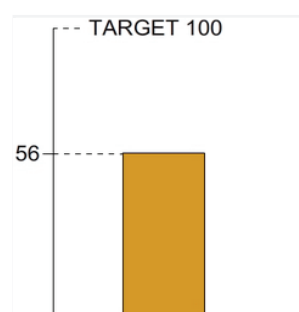
A: 33

- 7 Yugo is participating in a 100 km charity walk. He has reached the 59 km mark. How far left to go?




A: 41

- 8 The local school is trying to sell 100 tickets for its Easter raffle. From the graph, how many more ticket sales are needed to reach the target of 100?




A: 42

- 9 The supermarket has ordered 100 cans of beans. So far 42 out of 100 have been delivered. How many more cans need to be delivered?



A: 58

- 10 Cupcakes needed = 100. Cupcakes made = 71. How many cupcakes still need to be made?



A: 29