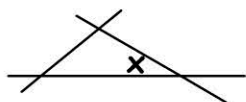


# Addition & Space 2D

Name:

Date:

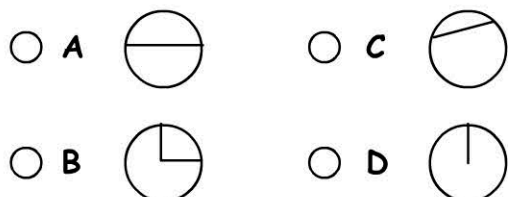
1. Name the angle labelled with an 'x'?



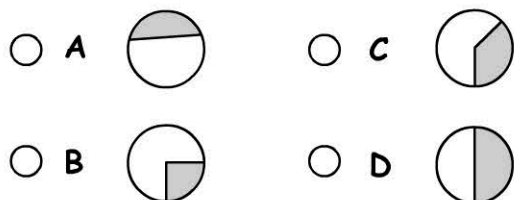
- acute                       reflex  
 obtuse                       right

2. 
$$\begin{array}{r} 9852574 \\ + 6698554 \\ \hline \end{array}$$

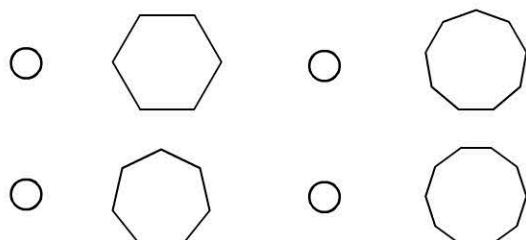
3. On which circle is a chord drawn?



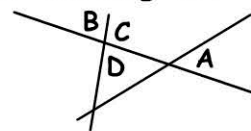
4. Which is the quadrant?



5. Which is the decagon?

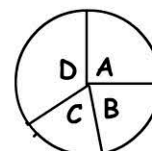


6. Identify the letter marking the obtuse angle.



- A                       C  
 B                       D

7. Identify the right angle within the circle.



- A                       C  
 B                       D

8. Which of these shapes has the greatest number of angles?

- pentagon                       nonagon  
 octagon                       hexagon

9. The sum of 3756886 and 99586.

10. Wrexall industries made \$4856945 in April and \$6885994 in May. What is the combined profit for April and May?    \$