

# WE LIKE ANIMALS





Name:

Date:

## Make a bar graph

- 1) Look at the animals on the chart. Choose the one you like the best.
- 2) Have each person in your class vote for one animal and tally up the results.
- 3) Make a bar graph to represent the number of people who like each animal.

Vote:



## Tally The Results:

walrus

orca

polar bear

seal

## Make A Bar Graph:



--	--	--	--	--	--	--	--	--	--	--	--	--	--	--



--	--	--	--	--	--	--	--	--	--	--	--	--	--	--



--	--	--	--	--	--	--	--	--	--	--	--	--	--	--



--	--	--	--	--	--	--	--	--	--	--	--	--	--	--

## Interpret The Graph:

Which animal is the most popular?

Which animal is the least popular?

Which animal had more votes- walrus or polar bear?

What was the difference between votes for orca and polar bear?

☆ One  equals \_\_\_ vote/s