

Name: _____

Add three numbers each less than six

$$4 + 3 + 3 = \underline{\quad}$$

$$1 + 4 + 1 = \underline{\quad}$$

$$1 + 2 + 1 = \underline{\quad}$$

$$2 + 3 + 5 = \underline{\quad}$$

$$1 + 2 + 3 = \underline{\quad}$$


$$2 + 0 + 5 = \underline{\quad}$$

$$1 + 2 + 4 = \underline{\quad}$$

$$3 + 3 + 4 = \underline{\quad}$$



Working Mathematically



1) How many eggs are there altogether? _____

2) Greg has 4 blue pens, 3 red pens and 5 black pens. How many pens does he have? _____

3) 'Scott' family pets:

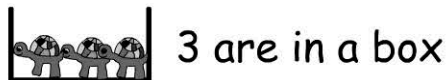
Birds = 3

Dogs = 2


Cats = 5

How many pets does the Scott family have?

4) Joe has 8 turtles.



3 are in a box



4 are in a cage



How many are under the towel? _____