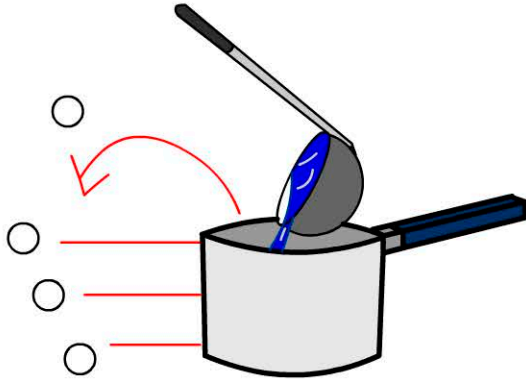


# Addition, Chance, Volume and Position

Name:

Date:

1. Which is the correct level?



2. 23 add 30 =

3. Where does the piece go?

Goes to B2.

	A	B	C
1	<input type="radio"/>		
2		<input type="radio"/>	<input type="radio"/>
3	<input type="radio"/>		

4. How many cups does it take to fill the jug?



- 1       4       10       15

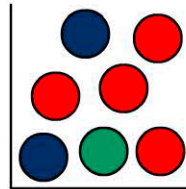
5.  $6 + 3 + \square = 14$

- 1       3       5       7

6. Click on B3.

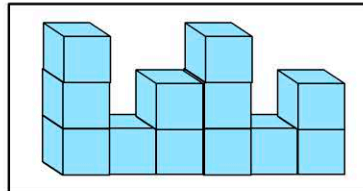
	A	B	C
1	<input type="radio"/>		<input type="radio"/>
2			
3	<input type="radio"/>	<input type="radio"/>	

7. What's the chance of picking two green marbles from the bag?



- 1 in 3  
 1 in 5  
 1 in 10  
 no chance

8. How many cubes in this model?



- 12       10  
 11       9

9.  $55 + 40 = \square$

10.  $21 + 10 + 20 = \square$