


Name: _____

Date: _____

3 Dimensional Objects


How many corners does each object have?



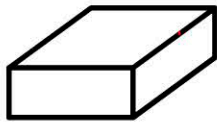
corners =




corners =



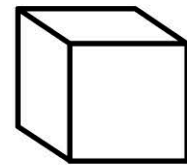
corners =



corners =



corners =



corners =

Addition

$5 + 5 =$

$4 + 9 =$

$8 + 6 =$

$9 + 7 =$

$10 + 7 =$

$4 + 7 =$

$5 + 8 =$

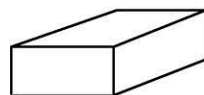
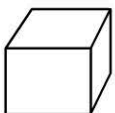
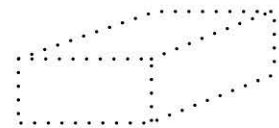

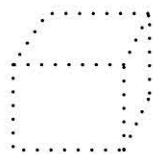

$6 + 6 =$

$7 + 7 =$

$9 + 8 =$

3 Dimensional Objects

Trace then match each object



Circle the objects that have **flat surfaces only**.

