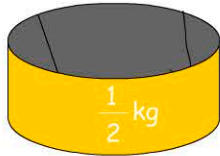


Mass

Name:


Date:

1. How heavy is the block?



- 100 grams 500 grams
 250 grams 1000 grams

2. What's the weight of the apple?




weight = grams

3. How heavy is a mouse for a computer?

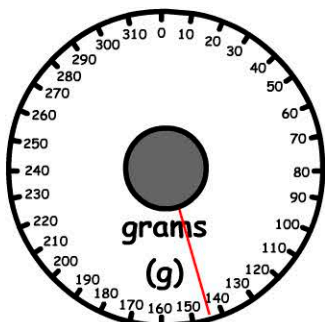
- 90 grams 780 grams
 360 grams 1 kg

4. What's the total weight?



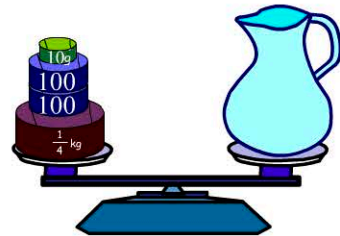
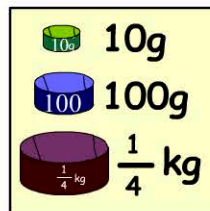
- 5000g 5150g
 5250g 5350g

5. What item is being weighed?



- A pineapple
 A grape
 A chicken
 An apple

6. How much does the empty jug weigh?



- 400g 460g
 440g 480g

7. What's George's weight in kilograms and grams?

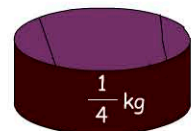


- GEORGE 47kg 890g
 47kg 90g
 47kg
 47kg 89g

8. Sally weighs 48kg. How much heavier than George is she?

- 1kg 50g
 110g 10g

9. How many weights are needed to weigh 1kg?



10. 5kg = grams