



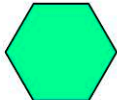

Name:

1. Which shape has three corners?

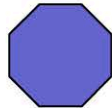
- triangle circle
 square pentagon
-

2. Squares, rectangles, trapeziums and parallelograms are quadrilaterals. How many sides do quadrilaterals have?

3. Which shape has 5 corners?





-  
  
-

4. Name this shape.

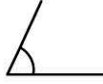

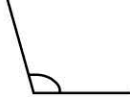



- octagon hexagon
 trapezium triangle
-

5. Which is a parallelogram?

-  
  
-





6. Which is the only angle less than a right angle?

-  
  
-

7. Which of these shapes has four corners?

- triangle pentagon
 trapezium hexagon
-

8. Which angle 'is not' a right angle?

-  
  
-

9. How many right angles in a rectangle?



10. How many right angles in this triangle?

