

Name : \_\_\_\_\_

## Subtraction

$64 - 5 = \underline{\quad}$        $98 - 9 = \underline{\quad}$        $47 - 4 = \underline{\quad}$

$82 - 9 = \underline{\quad}$        $23 - 2 = \underline{\quad}$        $80 - 6 = \underline{\quad}$

$73 - 5 = \underline{\quad}$        $73 - 3 = \underline{\quad}$        $57 - 7 = \underline{\quad}$

$32 - 4 = \underline{\quad}$        $58 - 1 = \underline{\quad}$        $52 - 8 = \underline{\quad}$






$85 - 6 = \underline{\quad}$        $47 - 10 = \underline{\quad}$        $49 - 9 = \underline{\quad}$

$37 - 10 = \underline{\quad}$        $47 - 2 = \underline{\quad}$        $42 - 5 = \underline{\quad}$

$13 - 8 = \underline{\quad}$        $29 - 2 = \underline{\quad}$

## Working Mathematically

Complete the table

fruit	started with	Sold	How many left
	93	7	86
	56	8	
	89	9	
	62	8	
	22	7	

Help Leon the fruit shop owner work out how much fruit he has left.

