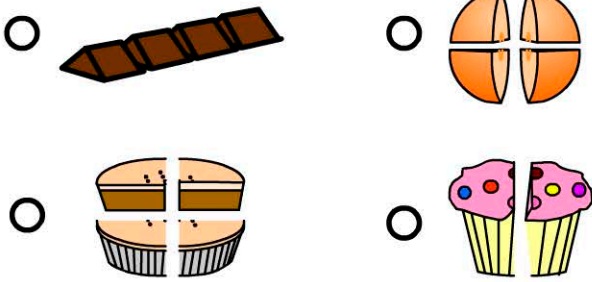
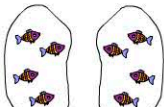


# Fractions

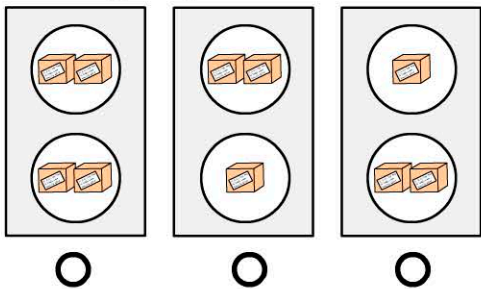
Name:

1. Which object is cut in half?



2.  How many fish altogether?

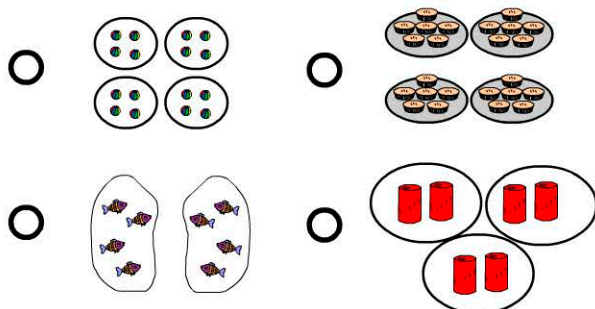
3. Which group is divided in half?



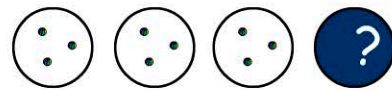
If this group is divided in half, how many in each smaller group?

- 1                       3  
 2                       4

5. Which group is divided in half?




6. The group is divided into quarters. How many dots are covered?

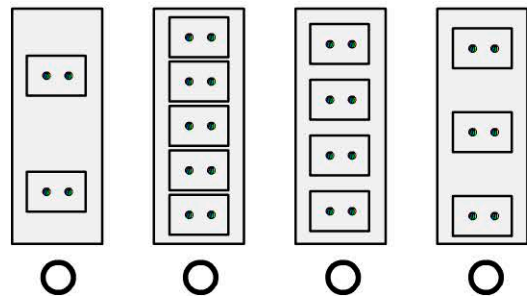


- 1                      2                      3                      4

7. Which object is cut into quarters?



8. Which group is divided into quarters?



9. Six eggs are divided into two equal groups. How many in each group?

10. 2 baskets. 3 eggs in each basket. How many eggs altogether?

score