



Share between four

- 1 Share 8 coins between 4 children. How many coins does each child get?



A:

- 3 36 children were asked their most liked fruit. The results are shown in the graph. How many students chose pears?



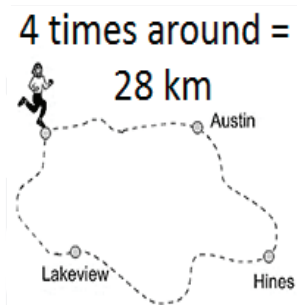
A:

- 5 4 balls cost \$40 to buy. What is the cost of each ball?



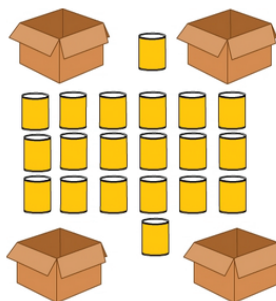
A:

- 7 The total distance of a race is 28 km, which is 4 laps of the course. How long is one lap of the course?



A:

- 9 These 20 tins are placed into 4 boxes so that each box has the SAME number of tins. How many tins are placed in each box?



A:

- 2 Share 32 sweets between 4 people. How many sweets does each person get?



A:

- 4 28 children are placed into 4 equal teams. How many children in each team?



A:

- 6 Share 24 bananas between 4 monkeys. How many bananas each?



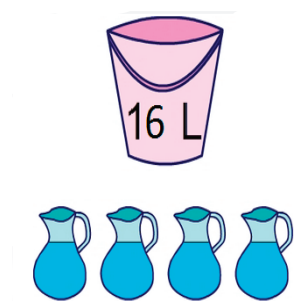
A:

- 8 Aisha worked for 24 hours over 4 days. She worked the same number of hours each day. How many hours did Aisha work each day?



A:

- 10 All the water from a 16 L bucket is poured into 4 jugs so that each jug has the same amount. How much water in each jug?



A: