

Name: _____

6 x Tables

$x = \underline{\quad}$ $x = \underline{\quad}$

$x = \underline{\quad}$ $x = \underline{\quad}$

$x = \underline{\quad}$ $x = \underline{\quad}$

$x = \underline{\quad}$ $x = \underline{\quad}$

$x = \underline{\quad}$ $x = \underline{\quad}$

$x = \underline{\quad}$ $x = \underline{\quad}$

$x = \underline{\quad}$ $x = \underline{\quad}$

$x = \underline{\quad}$ $x = \underline{\quad}$

$x = \underline{\quad}$ $x = \underline{\quad}$

$x = \underline{\quad}$ $x = \underline{\quad}$

$x = \underline{\quad}$ $x = \underline{\quad}$

$x = \underline{\quad}$ $x = \underline{\quad}$

$x = \underline{\quad}$ $x = \underline{\quad}$

$x = \underline{\quad}$ $x = \underline{\quad}$

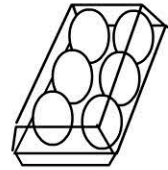
$x = \underline{\quad}$ $x = \underline{\quad}$

$x = \underline{\quad}$ $x = \underline{\quad}$

$x = \underline{\quad}$ $x = \underline{\quad}$

Working Mathematically


- 1) There are 6 eggs in a pack.



How many eggs in 5 packs? _____

- 2) Insects

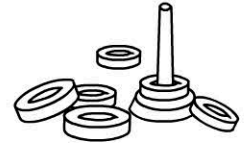
have 6 legs.



How many legs do 8 beetles have? _____


- 3) Each team has 6 quoits to throw at their target.

How many quoits do 7 teams have altogether? _____



- 4) Six children sit together in a table group in class.

How many children in 5 table groups? _____



- 5) There are 6 containers of juice in a pack.

How many containers in 4 packs? _____

