




Name: _____


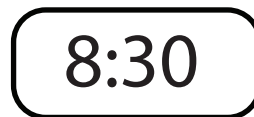

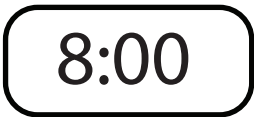
1) Which event takes about 15 minutes?

- eating dinner brushing teeth watching a movie
-


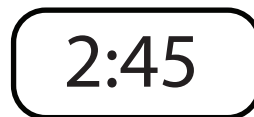
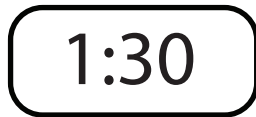

2) Which clock shows half past three?



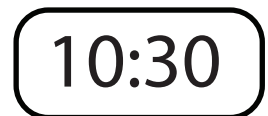
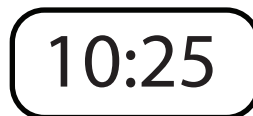
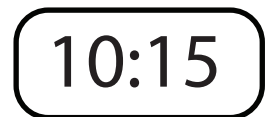
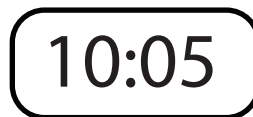

3) Which time is half past eight?



4) Which time is showing a quarter to two?

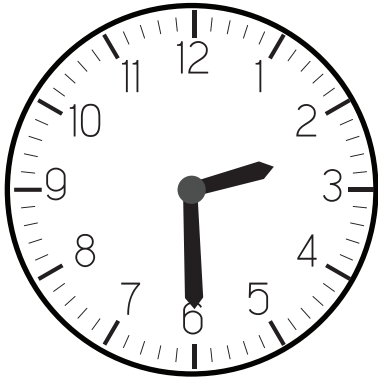


5) What time is shown on this clock?



Name: _____

6) What time is shown on this clock?



- two past six
- half past six
- half past two
- quarter to three

7) How long is half an hour?

5 minutes


10 minutes

15 minutes

30 minutes

45 minutes

8) This clock is upside down. What is the time on the clock?




8:15

8:30

9:30

6:30

9) Look at the time on the clock.



How many minutes until five o'clock? _____