

Name: _____

Date: _____

Mixed Number Operations

$4 \times 50 + 234 =$

$34 \times 7 + 746 =$

$7 \times 82 - 275 =$

$4 \times 6 + 9 \times 9 =$

$12 \times 5 + 8 \times 10 =$

$34 \times 3 + 60 \times 2 =$

$435 + 5 \times 6 =$

$774 + 34 \times 3 =$

$658 - 12 \times 5 =$


$4 \times 8 - 3 \times 9 =$

$98 \times 6 - 14 \times 5 =$

$45 \times 5 - 46 \times 2 =$

Chance

These cards were placed in a box.

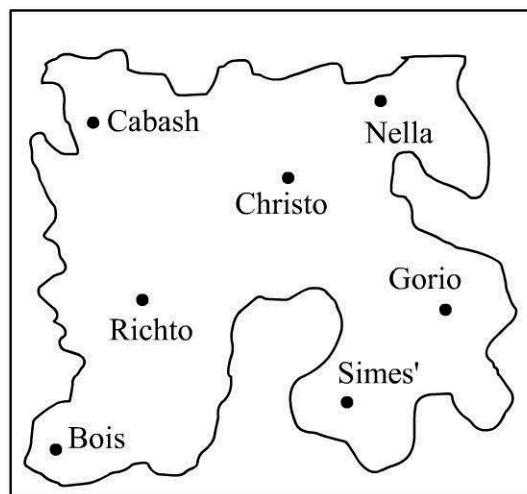
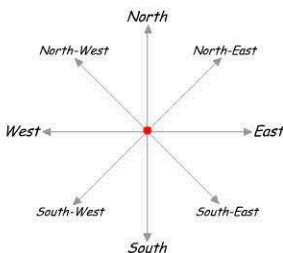


1) Which card has the greatest chance of being selected? **3** or **5** or **7** or **9**

2) What's the chance of choosing a card with the number 3 on it? ____ in ____ chance.

3) If you choose 3 cards in a row you are guaranteed of picking a card with the number 9.
True/False

Compass Directions



1) Which town is South-East of Christo? _____

2) Richto is _____ of Bois.

3) In which direction must you travel to go from Simes' to Gorio?
