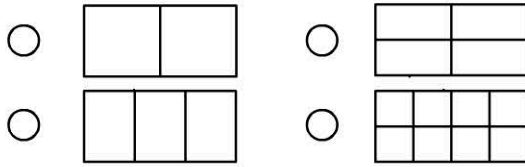


Name:


1. Which shape is divided into eighths?



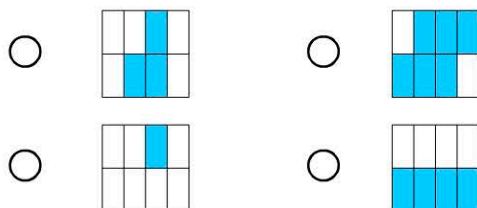
2. Type 56 out of 100 as a fraction.

100

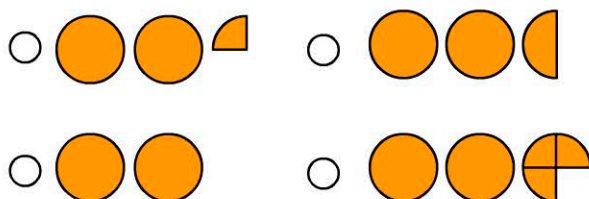
3. Which is the largest fraction?



4. Which shape has more than one half shaded?




5. Which shows $2\frac{1}{2}$?

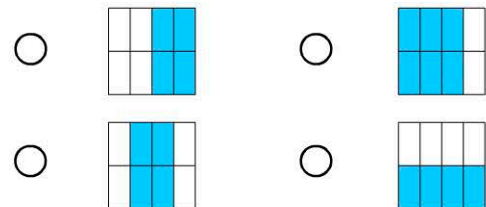


6.  Sandy ate: 

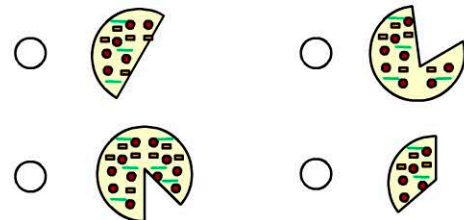
Who ate the same amount of pie as Sandy?




7. Which shape does not have exactly one half shaded?



8. Each person started with a whole pizza. Who ate more than half?



9. What fraction of the square is shaded?



10. What fraction of the square is shaded?

