

2D Space

Name: _____


Classifying sets of lines.

perpendicular, diagonal, horizontal, intersecting, vertical, parallel,

Name these types of lines:

horizontal parallel, vertical parallel.

a)




b)



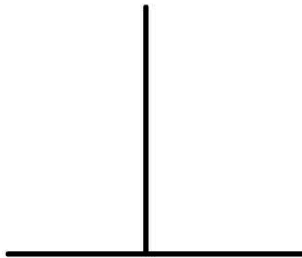
c)



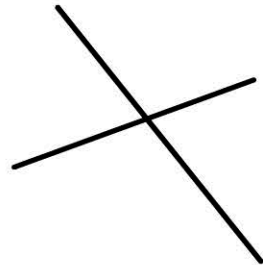
d)



e)




f)



g)



h)



i)

