


# Addition, Chance, Volume and Position

Name:

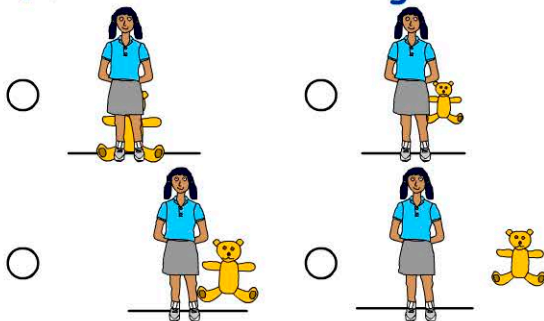
Date:

1. Which shows the correct level?



2. 72 add 10 =

3. In which picture is Rufus furthest behind the girl?



4. How many cups does it take to fill the bucket?



5      10      20      100  
                 

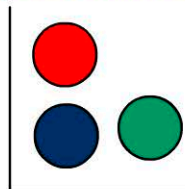
5.  $3 + 4 + \square = 8$

1      2      3      4  
                 

6. Click on A1.

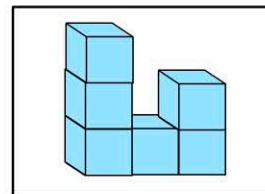
	A	B	C
1	<input type="radio"/>		<input type="radio"/>
2			
3	<input type="radio"/>	<input type="radio"/>	

7. What's the chance of picking a green marble?



- 1 in 3  
 1 in 5  
 1 in 10  
 no chance

8. How many cubes in this model?



- 4       5  
 6       7

9.  $34 + 20 = \square$

10.  $54 + 10 + 20 = \square$