


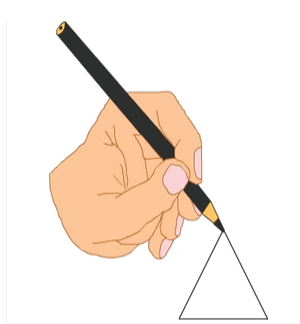
Single digit addition

- 1 Each carton contains 6 eggs. If May bought 2 cartons, how many eggs did she buy?




A: 12

- 3 Fred drew 5 triangles and 7 circles. How many shapes did he draw altogether?




A: 12

- 5 On the hill stood 2 adult cows and 2 baby cows. How many cows altogether?



A: 4

- 7 Lilly spent 6 coins to buy a hat and 9 coins to buy a ball. How many coins did Lilly spend altogether?



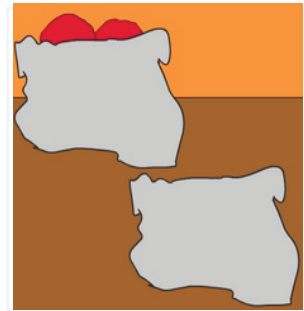
A: 15

- 9 Charlie broke 3 small plates and 2 large plates. How many plates did Charlie break altogether?



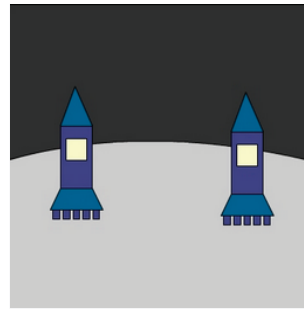
A: 5

- 2 There are 8 plums in one bag and 5 plums in another. How many plums altogether?




A: 13

- 4 Two rockets landed on the moon. The first rocket had 3 astronauts and the second had 6 astronauts on board. How many astronauts landed on the moon?



A: 9

- 6 In the tin there are 5 large pencils and 3 small pencils. How many pencils altogether in the tin?



A: 8

- 8 Lu ate five white chocolate bars and two dark chocolate bars. How many chocolate bars did she eat altogether?



A: 7

- 10 Simon sold 8 yellow tops and 5 blue tops. How many tops did he sell altogether?



A: 13