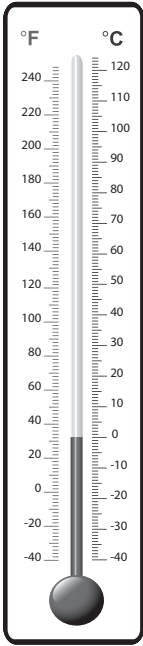


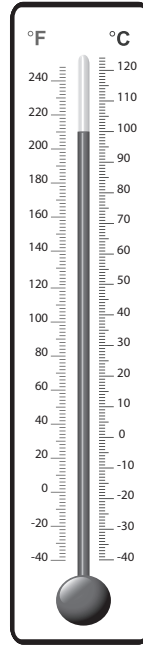
Changing States of Water



Temperature: _____

The _____ point of water.

Draw Example:



Temperature: _____

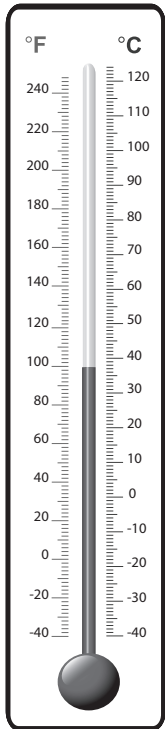
The _____ point of water.

Draw Example:

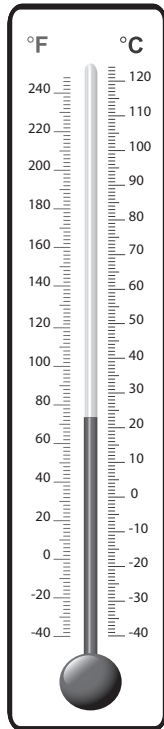
Temperature of Water

a) Write the temperatures shown on each thermometer. b) Label the conditions where you might find water at these temperatures.

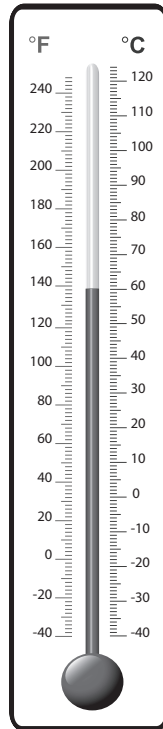
(ice in freezer, cold tap water, bath water, hot tap water, pool water)



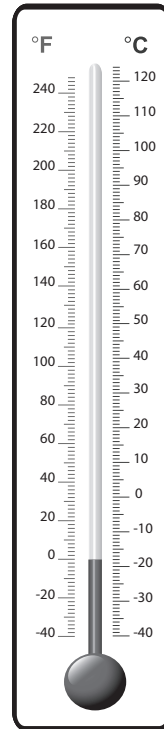
Temperature: _____




Temperature: _____



Temperature: _____



Temperature: _____



Temperature: _____
