

Name:

24 Hour Time

Question 1

The train from Central to Baysville departs at 8:30 p.m.
In 24 hour time, at what time does the train depart?

Question 2

Jenny is at work for 7 hours each day.
If she starts at 9:00 a.m., in 24 hour time what is her finishing time?

Question 3

Austin's 24-hour alarm clock is set for 05:30.
How many hours past midnight is the alarm clock set for?

Question 4

Show 1:45 p.m. in 24 hour time on the clock.



Question 5

Shown is the time on a 24-hour clock.
How many minutes until midnight?



Question 6

Sally's flight departed at 07:30, arriving at 16:30 on the same day.
How long was the flight?

Question 7

Show 26 minutes past 9 in the evening using 24 hour time.



Question 8

A movie starts at 19:45 and runs for 95 minutes.
In both 12 hour and 24 hour times, at what time will the movie end?

Question 9


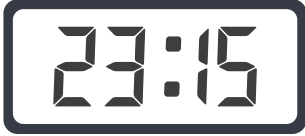

How many hours from 06:30 to 16:30 on the next day.

Question 10

Kelly's flight departs at 15:40. It takes her 90 minutes to drive to the airport and she needs to arrive 3 hours before her flight.
In 12 hour time, at what time should Kelly leave home?

ANSWERS

24 Hour Time

Question 1 The train from Central to Baysville departs at 8:30 p.m. In 24 hour time, at what time does the train depart?		20:30
Question 2 Jenny is at work for 7 hours each day. If she starts at 9:00 a.m., in 24 hour time what is her finishing time?		16:00
Question 3 Austin's 24-hour alarm clock is set for 05:30. How many hours past midnight is the alarm clock set for?		five and a half hours
Question 4 Show 1:45 p.m. in 24 hour time on the clock.		13:45
Question 5 Shown is the time on a 24-hour clock. How many minutes until midnight?		45 minutes
Question 6 Sally's flight departed at 07:30, arriving at 16:30 on the same day. How long was the flight?		9 hours
Question 7 Show 26 minutes past 9 in the evening using 24 hour time.		21:26
Question 8 A movie starts at 19:45 and runs for 95 minutes. In both 12 hour and 24 hour times, at what time will the movie end?		9:20 p.m. 21:20
Question 9 How many hours from 06:30 to 16:30 on the next day.		34 hours
Question 10 Kelly's flight departs at 15:40. It takes her 90 minutes to drive to the airport and she needs to arrive 3 hours before her flight. In 12 hour time, at what time should Kelly leave home?		11:10 a.m.