


Volume, Chance and Position

Name:

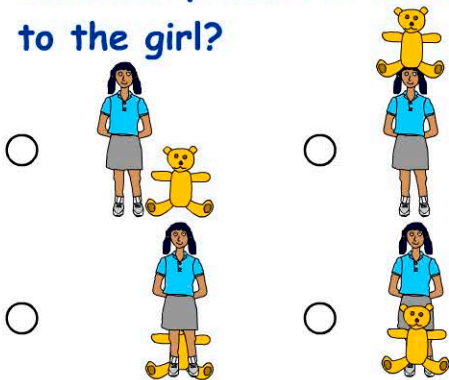
Date:

1. Which shows the correct level?

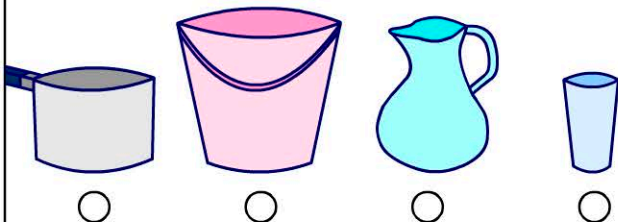


2. 64 add 10 =

3. In which picture is Rufus next to the girl?



4. Which holds the least water?



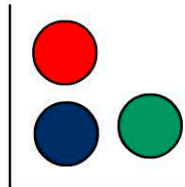
5. $6 + 4 + 1 =$

- 9
 10
 11
 12

6. Click on C1.

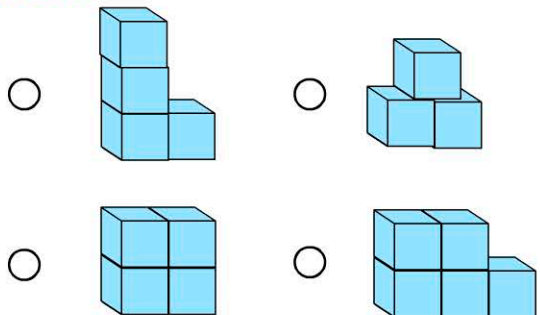
	A	B	C
1	<input type="radio"/>		<input type="radio"/>
2			
3	<input type="radio"/>	<input type="radio"/>	

7. What's the chance of picking a yellow marble?



- 1 in 3
 1 in 5
 1 in 10
 no chance

8. Which model has the least cubes?



9. $9 + 9 =$

10. $18 + 10 =$