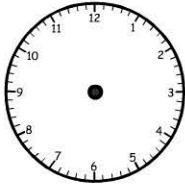


Name: _____

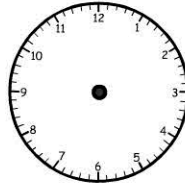
Theme Based Study Sheet

Analog and digital time

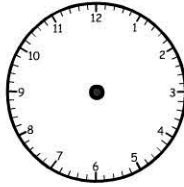
Record the digital time on the analog clock.



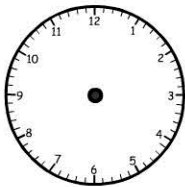
6:30



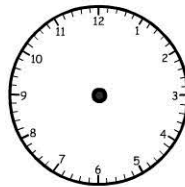
10:45



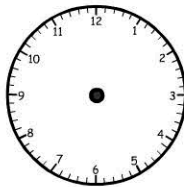
4:15



7:55



12:25



1:05

Estimate and measure

Estimate the time for you to complete the following tasks. Then perform the tasks and measure the amount of time it actually takes.

1. Write your name and address three times.
2. Count backwards from 100.
3. Write the eight times table.
4. Say the five, six and seven times table.

How accurate were your estimations?.

Time machine

On a separate page, design and draw your own "Time Machine".

What time period would you travel to first?

What person from history would you like to meet?

Time words

Complete the following sentences using words from the list below.

Next June I will be ten _____ old.

The fireworks lasted for about twenty _____.

Mary can hold her breath for fifty nine _____.

I like to sleep for at least eight _____ every night.

Winter lasts for three _____.

seconds months weeks minutes hours years days

Number Crunchers

How many minutes in one day? _____

Which group of months has the most days, the first six months (January to June) or the last six months (July to December)? _____

Clair started running at 10.05 and stopped at 11.10. She stopped once for five minutes and once for ten minutes? For how long was Claire actually running? _____

How many days old will you be next birthday? _____

What is the date 5 days after the 27th of February? _____



For more fun and revision you can play games online using Studyladder's website.