

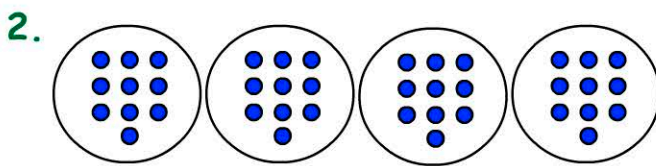
Four Operations, Money and Mass 2

Name:

Date:

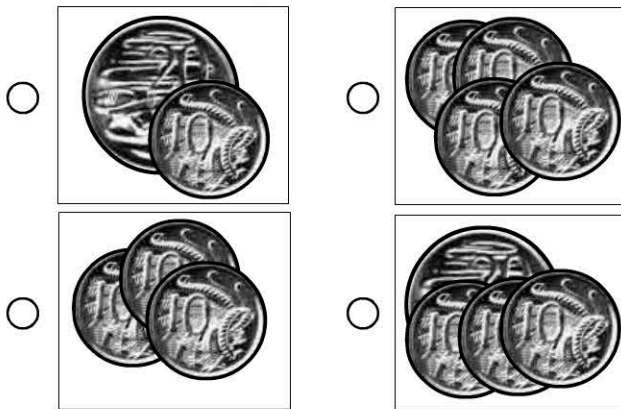
1. $10 + 10 + 10 =$

- 10 30
 20 40




4 groups of 10 =

3. Which is equal to 50c?



4. The fish is equal in weight to?




- 2 blocks
 4 blocks
 6 blocks
 8 blocks

5. $7 + 3 + 9 =$

- 18 19 20 21

6. $24 \div 3 =$



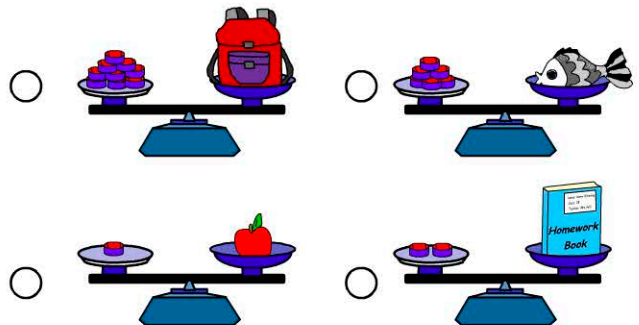
- 3 8
 6 12

7. How much money does Jen have?



- 80 cents
 70 cents
 60 cents
 50 cents

8. Which item is the lightest?



9. Which number comes next in the pattern?

25, 30, 35, 40,

10. $5 \times 10 =$