





# Groups of 2

How many dots in each row?



1 group of 2 = \_\_\_\_\_

2 groups of 2 = \_\_\_\_\_

3 groups of 2 = \_\_\_\_\_

4 groups of 2 = \_\_\_\_\_

5 groups of 2 = \_\_\_\_\_

6 groups of 2 = \_\_\_\_\_


7 groups of 2 = \_\_\_\_\_

8 groups of 2 = \_\_\_\_\_

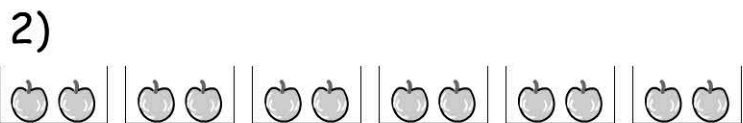
9 groups of 2 = \_\_\_\_\_

10 groups of 2 = \_\_\_\_\_

## Working Mathematically




Each emu has 2 eggs. How many eggs altogether? \_\_\_\_\_



Each box has 2 apples. How many apples altogether? \_\_\_\_\_

3) 3 groups of 2 equals \_\_\_\_\_

4) 6 groups of 2 equals \_\_\_\_\_



Each cage has 2 turtles. How many turtles in 10 cages?

- 10 turtles
- 14 turtles
- 18 turtles
- 20 turtles