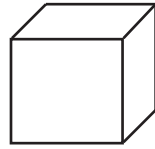


Name: _____

Place Value - thousands, hundreds, tens and ones



thousands



hundreds



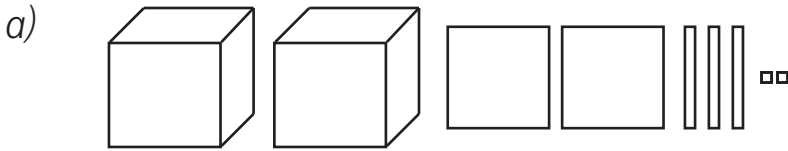
tens



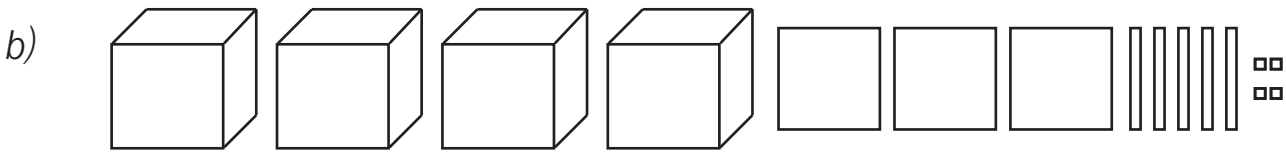
ones

For each number, write how many thousands, hundreds, tens and ones it has.

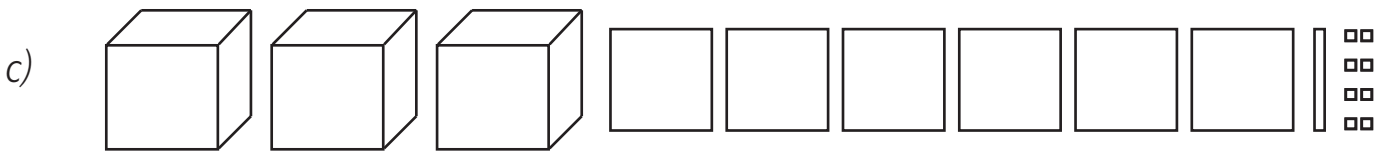
Then, write the number that it makes.



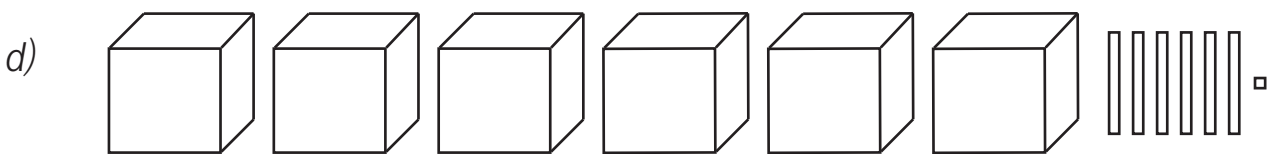
_____ thousands, _____ hundreds, _____ tens and _____ ones. Number: _____



_____ thousands, _____ hundreds, _____ tens and _____ ones. Number: _____



_____ thousands, _____ hundreds, _____ tens and _____ ones. Number: _____



_____ thousands, _____ hundreds, _____ tens and _____ ones. Number: _____

a) What number is made using 8 thousands, 6 hundreds, 4 tens and 8 ones? _____

b) What number is made using 1 thousand, 9 hundreds, 9 tens and 9 ones? _____

c) What number is made using 4 thousands, 0 hundreds, 4 tens and 2 ones? _____

d) Add two thousand to 3 thousands, 6 hundreds, 8 tens and 9 ones = _____

e) Add four hundred to 6 thousands, 7 hundreds, 6 tens and 5 ones = _____

f) Add eight ones to 7 thousands, 8 hundreds, 4 tens and 8 ones = _____