

Name: \_\_\_\_\_

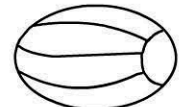
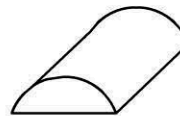
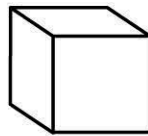
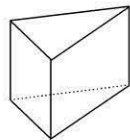
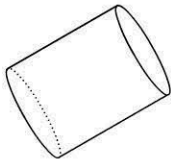


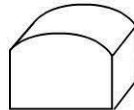
Date: \_\_\_\_\_

### 3 Dimensional objects

Colour the objects with all flat sides **red**.

Colour the objects with all curved sides **blue**.

Colour the objects with flat and curved sides **green**.



### Addition

$5 + 3 =$

$5 + 2 =$

$5 + 5 =$

$5 + 1 =$

$5 + 4 =$

$10 + 3 =$

$10 + 5 =$

$10 + 6 =$

$10 + 7 =$

$10 + 8 =$

### Three Dimensional Objects

Match the object to the name.

Cone  
Shaped

Ball  
Shaped

Box  
Shaped

Tube  
Shaped

