

Name: _____

Short Multiplication

$$\begin{array}{r} 50 \\ \times 2 \\ \hline \\ \hline \end{array}$$

$$\begin{array}{r} 90 \\ \times 6 \\ \hline \\ \hline \end{array}$$

$$\begin{array}{r} 60 \\ \times 6 \\ \hline \\ \hline \end{array}$$

$$\begin{array}{r} 70 \\ \times 3 \\ \hline \\ \hline \end{array}$$

$$\begin{array}{r} 30 \\ \times 4 \\ \hline \\ \hline \end{array}$$

$$\begin{array}{r} 50 \\ \times 6 \\ \hline \\ \hline \end{array}$$

$$\begin{array}{r} 40 \\ \times 2 \\ \hline \\ \hline \end{array}$$

$$\begin{array}{r} 70 \\ \times 6 \\ \hline \\ \hline \end{array}$$

$$\begin{array}{r} 90 \\ \times 8 \\ \hline \\ \hline \end{array}$$

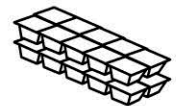
$$\begin{array}{r} 60 \\ \times 7 \\ \hline \\ \hline \end{array}$$

$$\begin{array}{r} 80 \\ \times 2 \\ \hline \\ \hline \end{array}$$

$$\begin{array}{r} 60 \\ \times 2 \\ \hline \\ \hline \end{array}$$

Working mathematically

- 1) Tomato sauce containers are sold in lots of 20. How many sauce containers will I get if I buy 7 lots? _____

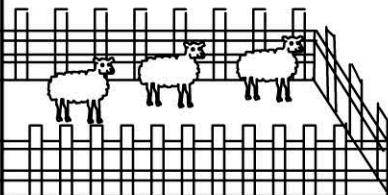


- 2) There are 30 plants in each row of the garden.




How many plants in 8 rows? _____

- 3) On my farm 50 sheep are kept in every yard?



How many sheep in 9 yards?



- 4) There are 90 offices on each floor of the building.

How many offices in the building? _____