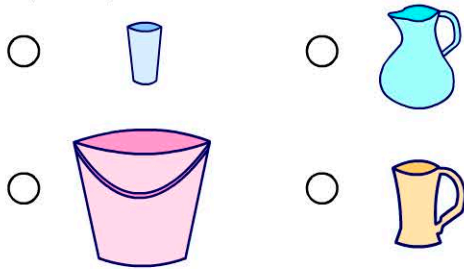


Volume & Capacity

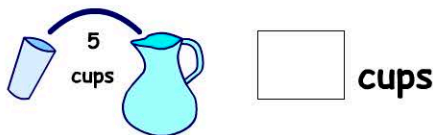
Name:

Date:

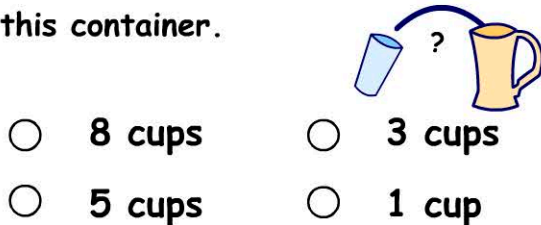
1. Which container has the greatest capacity?



2. It takes 5 cups to fill a jug. How many cups will it take to fill 3 jugs?




3. How many cups would it take to fill this container.



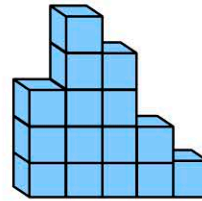
4. Estimate how many cups to fill the bucket.



5. Which container has the least capacity?



6.



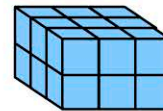
How many cubes in this stack?



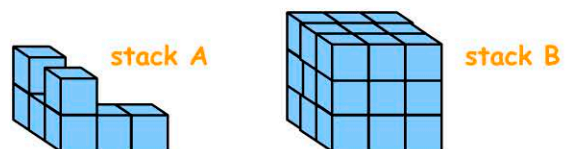
7. If the bottom layer is removed, how many cubes are left in the stack?



8. How many cubes in the rectangular prism?



9.



How many cubes in stack B?

10. How many cubes need to be added to stack A to make stack B?