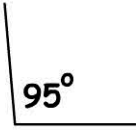
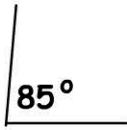

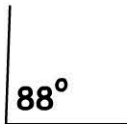


# 2D Space

Name:

Date:

1. Which angle is a right angle?

- 
   
 
 

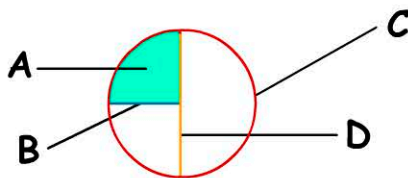
2. A circle has a radius of 10cm. What is its diameter?

Diameter =  cm.

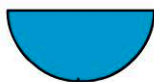
3. Which shape has 6 obtuse angles ?

- pentagon     heptagon  
 hexagon     octagon

4. Which is the circumference?

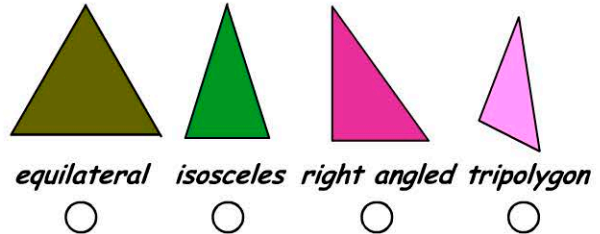
- 
  
 A     C  
 B     D

5. What is the name for half a circle?



- halfcircle     hemicircle  
 midcircle     semicircle

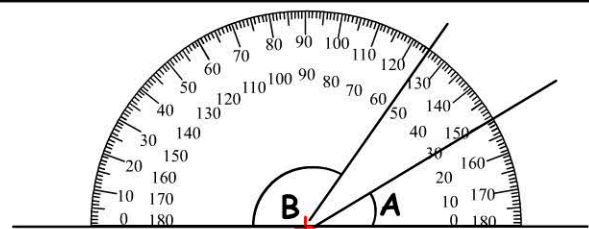
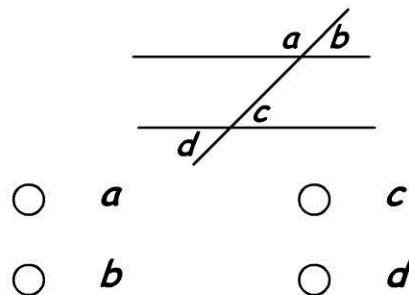
6. Which triangle is named incorrectly ?



7. Name this triangle: A triangle with three unequal sides and angles.?

- scaled     scalene  
 scaleur     scaline

8. Identify the obtuse angle.



Clue: The answers are multiples of five

9. Use the protractor to measure angle A. =  degrees

10. Angle B =  degrees