

Name: _____

Date: _____

Counting On

Write the next number in each pattern.

1) 2, 4, 6, _____

2) 10, 20, 30, _____

3) 5, 10, 15, _____

4) 100, 200, 300, _____

Before and After

Write the number before and after.

1) _____ 12 _____

2) _____ 24 _____

3) _____ 30 _____

Write the number 2 before and 2 after.

1) _____ 16 _____
-2 +2

2) _____ 36 _____
-2 +2

3) _____ 40 _____
-2 +2

Addition

1) $3 + 6 =$

2) $2 + 5 =$

3) $5 + 5 =$

4) $7 + 2 =$

5) $9 + 3 =$

6) $8 + 5 =$

7) $7 + 5 =$





8) $4 + 9 =$

9) $6 + 8 =$

10) $9 + 7 =$

Lines

Circle the parallel lines.



Properties of 2D Shapes : rectangle, triangle, circle

